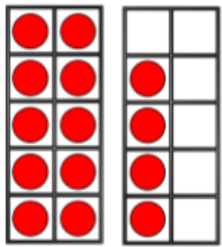



Numbers to 20

I just know it!



3



14



Counting on in 1s



+1 +1 +1 +1

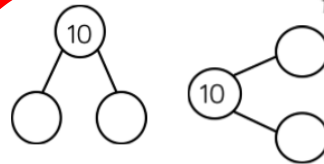


Find 1 more

Notice the relationships




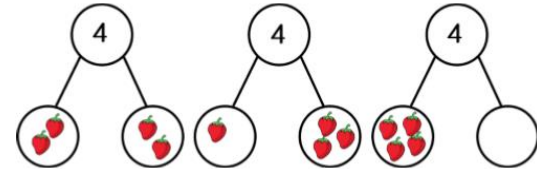
1 more than 4 is 5



How shall I add?

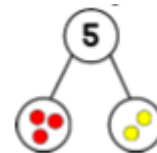
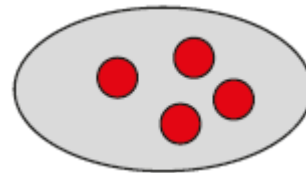
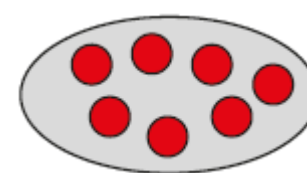
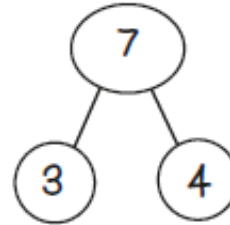


Explore addition bonds of single digits and ten



What is 7 add 4?
How many are there altogether?

Count all



5+2=7

