


19/01/2021

LO: I can find and represent all subtraction number facts of 13.


Addition & Subtraction; Facts of 11-16




Do it




13 - =




13 - =




13 - =




13 - =




13 - =




13 - =




13 - =




13 - =




13 - =




13 - =




13 - =



13 - =



13 - =



13 - =

Show me

Use the last sheet to help you with the answers below.

$9 = 13 - \square$

$4 = 13 - \square$

$1 = 13 - \square$

$8 = 13 - \square$

$2 = 13 - \square$

$11 = 13 - \square$

$13 = 13 - \square$

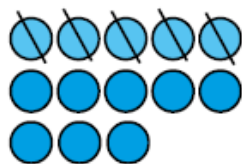
$3 = 13 - \square$



Secure it



Colin thinks that he has represented $13 - 8 = 5$



Key words

13

8

5

Explain why he is incorrect.

Colin is incorrect because I know that _____ is the part that I am taking away from _____ and _____ is the part that I have left.