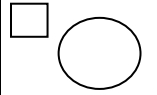


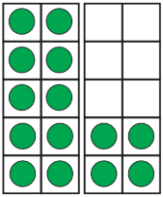
22/01/2021

LO: I can find and represent all subtraction number facts of 14.


Addition & Subtraction; Facts of 11-16



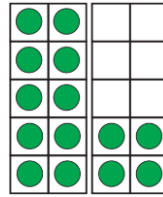
Do it



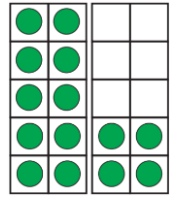
$14 - 3 = \underline{\quad}$




$14 - 4 = \underline{\quad}$



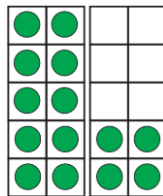
$14 - 10 = \underline{\quad}$



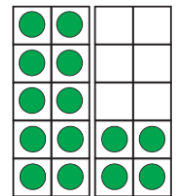
$\underline{\quad} = 14 - 8$



$\underline{\quad} = 14 - 5$



$\underline{\quad} = 14 - \underline{\quad}$



$\underline{\quad} = 14 - \underline{\quad}$

Show me

Can you find and represent all of the other subtraction facts for 14?

Secure it



Colin thinks:

$14 - 1 = 15$

Key words

1

13

14

Explain why he is incorrect.

Colin is incorrect because I know that _____ is the part that I am taking away from _____ and _____ is the part that I should have left.

Correct number

sentence: _____