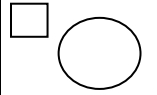


26/01/2021


LO: I can find and represent all addition number facts of 15


Addition & Subtraction; Facts of 11-16





Do it


Calculate and represent


$$10 + \square = 15$$


$$4 + \square = 15$$


$$15 = 6 + \square$$


$$15 = 7 + \square$$


$$15 = 8 + \square$$


$$15 = \square + 9$$


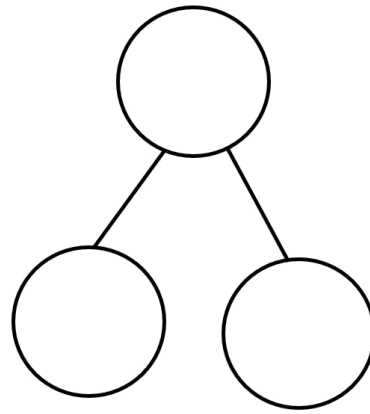
Show it: Can you find more addition statements. Represent all the ways to show the addition number sentences to make 15.

Secure it



Colin thinks that:
 $15 + 7 = 8.$

Key words



Key words

15

7

8

Explain why he is incorrect.

Colin is incorrect because I know that _____
is the whole and the parts are _____ and
_____.

The correct calculation is _____.

Deepen it:

Find the missing numbers. Solve it in different ways. Can you solve it using only 2 numbers?

$$\square + \square + \square = 15$$

$$\square + \square + \square = 15$$


$$\square + \square + \square = 15$$

$$\square + \square + \square = 15$$

$$\square + \square + \square = 15$$

$$\square + \square + \square = 15$$

Show it: Can you find more addition statements. Represent all the ways to show the addition number sentences to make 15.




$$\underline{\quad} + \underline{\quad} = \underline{\quad}$$




$$\underline{\quad} + \underline{\quad} = \underline{\quad}$$




$$\underline{\quad} + \underline{\quad} = \underline{\quad}$$




$$\underline{\quad} + \underline{\quad} = \underline{\quad}$$




$$\underline{\quad} + \underline{\quad} = \underline{\quad}$$




$$\underline{\quad} + \underline{\quad} = \underline{\quad}$$




$$\underline{\quad} + \underline{\quad} = \underline{\quad}$$




$$\underline{\quad} + \underline{\quad} = \underline{\quad}$$




$$\underline{\quad} + \underline{\quad} = \underline{\quad}$$




$$\underline{\quad} + \underline{\quad} = \underline{\quad}$$




$$\underline{\quad} + \underline{\quad} = \underline{\quad}$$



$$\underline{\quad} + \underline{\quad} = \underline{\quad}$$




$$\underline{\quad} + \underline{\quad} = \underline{\quad}$$



$$\underline{\quad} + \underline{\quad} = \underline{\quad}$$



$$\underline{\quad} + \underline{\quad} = \underline{\quad}$$



$$\underline{\quad} + \underline{\quad} = \underline{\quad}$$