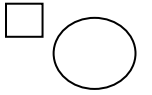


03/02/2021

LO: I can order the lengths from shortest to longest

Measurement : Length



Do it

Can you put the objects or lines in order from shortest to the longest?

Lines

A _____

Shortest

B _____

C _____

Longest

Pencils

A 

Shortest

B 

C 

Longest

Straws

A 


Shortest

B 

C 


Longest

Caterpillars

A 

Shortest

B 

C 

Longest



Show it:

Length Hunt Can you find three objects in your house and order them from the shortest to the longest?

Secure it



Colin thinks that lines are in order from shortest to longest.

A



B



C



D



Explain why he is incorrect.

Colin is incorrect because Colin measured line C from a different starting point so line C

is not _____ than the one before and _____ than the one after.

Correct order from shortest to longest

Line _____

Line _____

Line _____

Line _____

Key words

longer

shorter

Deepen it:

Always/Sometimes/Never True

If four pencils are in order from shortest to longest, you need to swap two pencils so that they are in order from longest to shortest.

