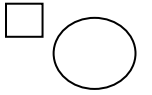




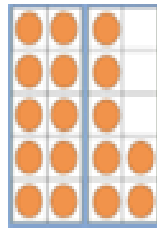
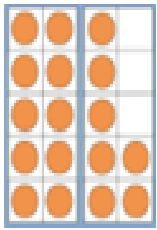
22/01/2021

LO: I can find and represent all subtraction number facts of 14.

Addition & Subtraction; Facts of 11-16



Do it


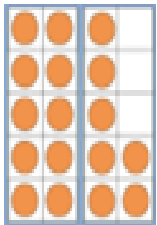


$17 - 6 = \underline{\quad}$

$17 - 7 = \underline{\quad}$

$17 - 8 = \underline{\quad}$

$\underline{\quad} = 17 - 4$

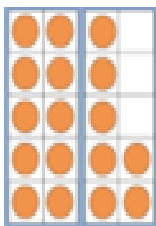


$\underline{\quad} = 17 - 3$

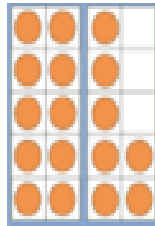
$\underline{\quad} = 17 - \underline{\quad}$

Show me


Can you find and represent all of the other subtraction facts for 17



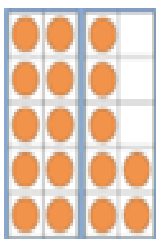
$\underline{\quad} - \underline{\quad} = \underline{\quad}$




$\underline{\quad} - \underline{\quad} = \underline{\quad}$



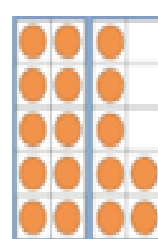
$\underline{\quad} - \underline{\quad} = \underline{\quad}$





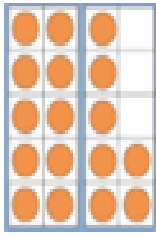
$\underline{\quad} - \underline{\quad} = \underline{\quad}$



$\underline{\quad} - \underline{\quad} = \underline{\quad}$





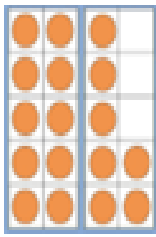
$\underline{\quad} - \underline{\quad} = \underline{\quad}$



$$\underline{\quad} - \underline{\quad} = \underline{\quad}$$

$$\underline{\quad} - \underline{\quad} = \underline{\quad}$$

$$\underline{\quad} - \underline{\quad} = \underline{\quad}$$



$$\underline{\quad} - \underline{\quad} = \underline{\quad}$$

$$\underline{\quad} - \underline{\quad} = \underline{\quad}$$

$$\underline{\quad} - \underline{\quad} = \underline{\quad}$$

Secure it



Colin thinks
 $10 = 7 - 17$

Key words

- 10
- 17
- 7

Explain why he is incorrect.

Colin is incorrect because you always take away from the whole so _____ is the whole, _____ is the part that should be taken away and _____ is the part that I have left.

Correct number sentence:

Deepen it - Draw a picture to represent each problem and solve it:

- A plant has 17 leaves. 3 fall off. How many are left?
- There are 17 bikes in a park. 5 go away. How many are left?
- There are 17 buns on a plate. Colin eats 8. How many buns are left?

Can you make up any more stories about 18?