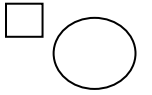


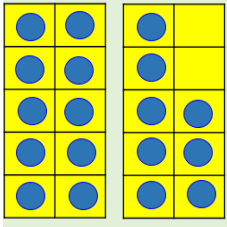
03/03/2021

LO: I can find and represent all subtraction number facts of 18.

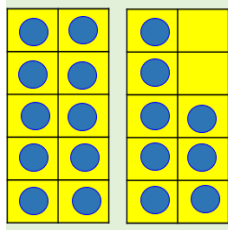
**Addition & Subtraction; Facts of 18**



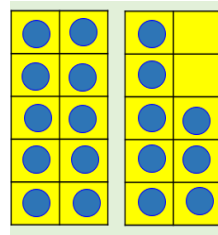
**Do it**



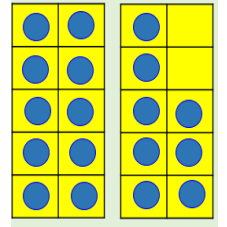
$18 - 8 = \underline{\quad}$



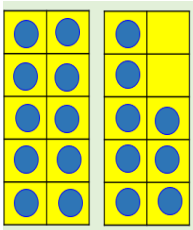
$18 - 7 = \underline{\quad}$



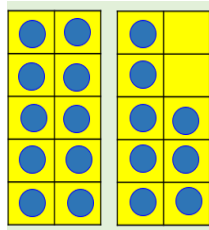
$18 - 6 = \underline{\quad}$



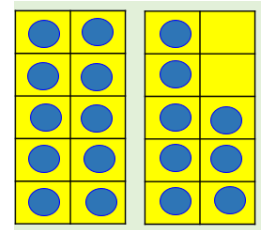
$\underline{\quad} = 18 - 10$



$\underline{\quad} = 18 - 9$



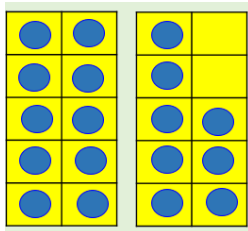
$\underline{\quad} = 18 - \underline{\quad}$



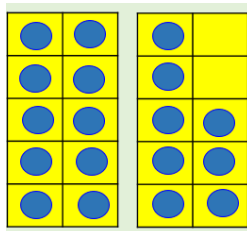
$\underline{\quad} = 18 - \underline{\quad}$

**Find more**

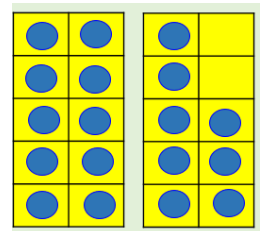
Can you find and represent all of the other subtraction facts for 18



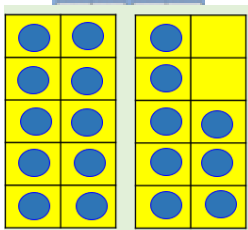
$\underline{\quad} - \underline{\quad} = \underline{\quad}$



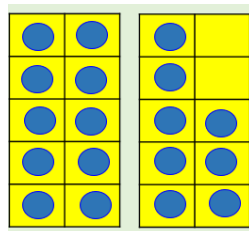
$\underline{\quad} - \underline{\quad} = \underline{\quad}$



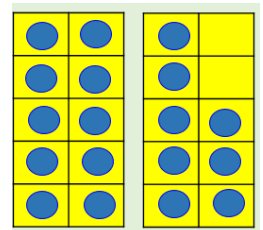
$\underline{\quad} - \underline{\quad} = \underline{\quad}$



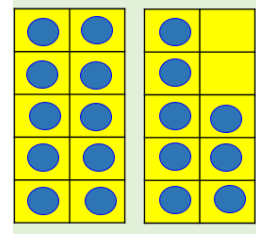
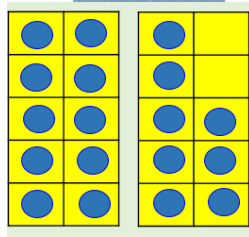
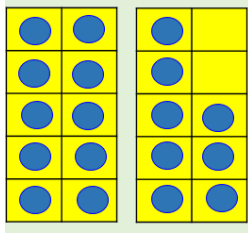
$\underline{\quad} - \underline{\quad} = \underline{\quad}$



$\underline{\quad} - \underline{\quad} = \underline{\quad}$



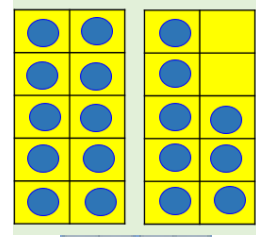
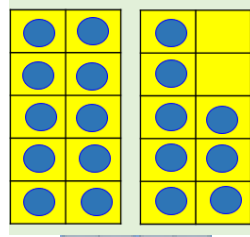
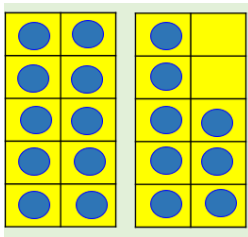
$\underline{\quad} - \underline{\quad} = \underline{\quad}$



$$\underline{\quad} - \underline{\quad} = \underline{\quad}$$

$$\underline{\quad} - \underline{\quad} = \underline{\quad}$$

$$\underline{\quad} - \underline{\quad} = \underline{\quad}$$

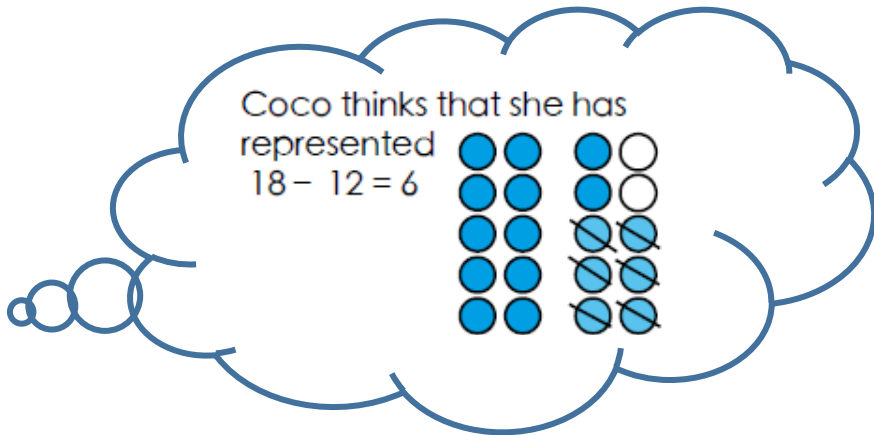


$$\underline{\quad} - \underline{\quad} = \underline{\quad}$$

$$\underline{\quad} - \underline{\quad} = \underline{\quad}$$

$$\underline{\quad} - \underline{\quad} = \underline{\quad}$$

**Secure it**




**Key words**

- 18
- 12
- 6

**Explain why she is incorrect.**

Coco is incorrect because I know that \_\_\_\_\_ is the part that I am taking away from \_\_\_\_\_ and \_\_\_\_\_ is the part that I have left.

Correct representation



Deepen it -

Find the missing digits.

$$18 - 8 = \square\square$$

$$18 - \square = 1\square$$

$$1\square = 18 - \square$$

$$14 = 18 - \square$$

Solve each calculation in several ways where possible.

Solve all the calculations together using the digits 0, 1, 2, 3, 4, 5 and 6 once each.

---